


I

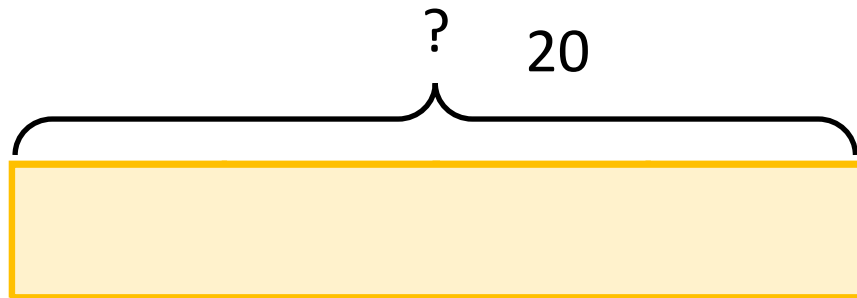
Jon has some flowers.

Here are a quarter of Jon's flowers.



How many flowers does Jon have?

Model



Calculations

$$4 \times 5 = 20$$

Jon has 20 flowers.

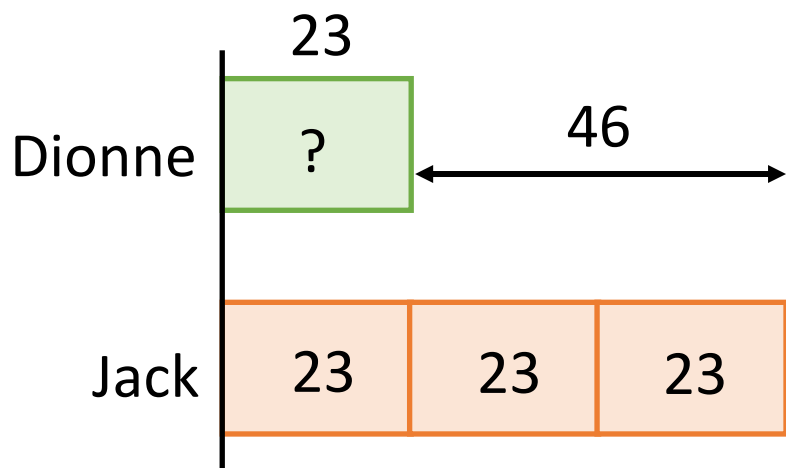
2

Jack has 3 times as many sweets as Dionne.

Jack has 46 more sweets than Dionne.

How many sweets does Dionne have?

Model



Calculations

$$46 \div 2 = 23$$

Dionne has 23 sweets.